


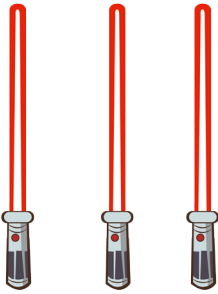
STAR WARS

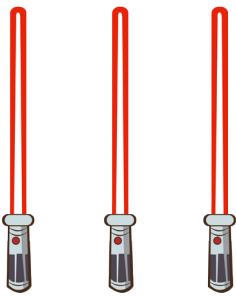




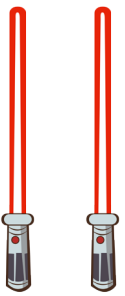
MAY THE
4TH
BE WITH YOU


MATH
STUDYING 4

ADDING LIGHTSABERS

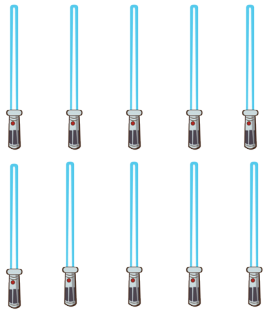

 +  = _____

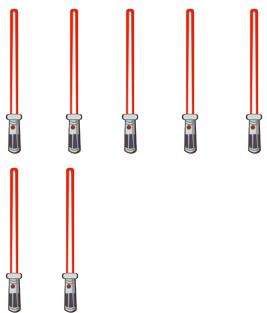

 +  = _____

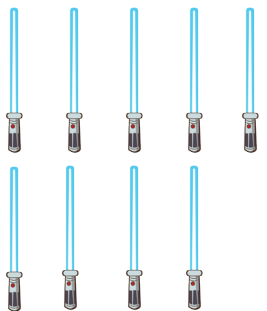

 +  = _____

 + 0 = _____

SUBTRACTING LIGHTSABERS

 $-$  $=$

 $-$  $=$

 $-$  $=$

 $-$ **0** $=$

GALAXY STORY PROBLEMS

Luke has 2 lightsabers and Darth Vader has 2 lightsabers. How many lightsabers do they have altogether?

_____ + or - _____ = _____

There are _____ lightsabers altogether.



There were 7 stormtroopers in the room. Darth Vader sent 3 away on a mission. How many were left?

_____ + or - _____ = _____

There were _____ stormtroopers left in the room.



Yoda trained 2 Jedi on Monday and 2 Jedi on Tuesday. How many Jedi did he train altogether?

_____ + or - _____ = _____

Yoda trained _____ Jedi.



Chewbacca ate 10 chocolate chip cookies and 6 peanut butter cookies. How many more chocolate chip cookies did he eat?

_____ + or - _____ = _____

Chewbacca ate _____ more chocolate chip cookies.



STAR SUDOKU WARS